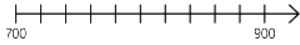
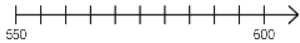


Estimating reasoning

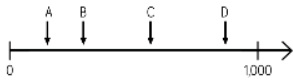
Draw an arrow to show the number 800




Draw an arrow to show the number 560



Which letter is closest to 250?

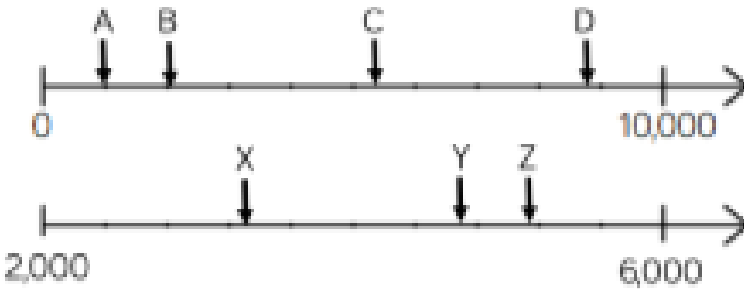


Estimate the value of A.




If the arrow is pointing to 780, what could the start and end numbers be?

Find three different ways and explain your reasoning.



Estimate where seven hundred and twenty-five will go on each of the number lines.



Explain why it is not in the same place on each number line.